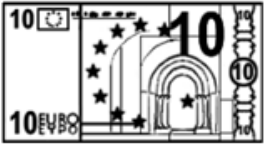


Qui a le plus d'argent ?



Calcul :

Dédé a  euros.



Calcul :

Patti a  euros.



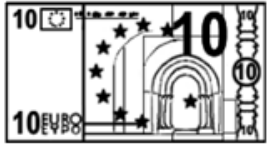
Calcul :

Picbille a  euros.



C'est  qui a le plus d'argent.

Qui a le plus d'argent ?



Calcul :

Dédé a  euros.



Calcul :

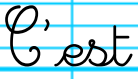
Patti a  euros.



Calcul :

Picille a  euros.



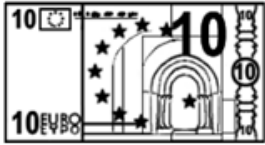
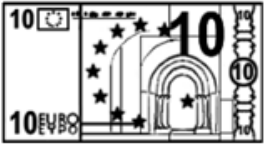
C'est  qui a le plus d'argent.

Qui a le plus d'argent ?




Calcul :

Dédé a  euros.



Calcul :

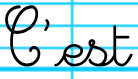
Patti a  euros.




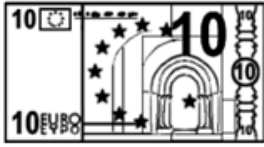
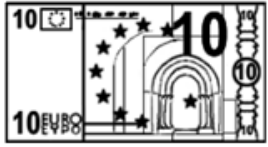
Calcul :

Picbille a  euros.



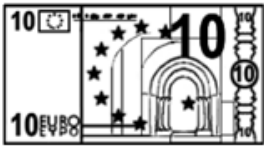
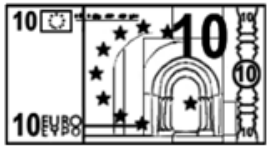
C'est  qui a le plus d'argent.

Qui a le plus d'argent ?



Calcul :

Dédé a euros.



Calcul :

Patti a euros.






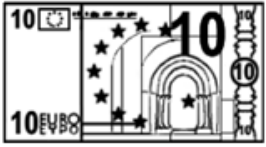
Calcul :

Picbille a euros.




C'est qui a le plus d'argent.

Qui a le plus d'argent ?



Calcul :

Dédé a  euros.



Calcul :

Patti a  euros.



Calcul :

Picbille a  euros.



C'est  qui a le plus d'argent.

Qui a le plus d'argent ?




Calcul :

Dédé a  euros.



Calcul :


Patti a  euros.



Calcul :

Picbille a  euros.



C'est  qui a le plus d'argent.